


2021 WORKSHEET 8

NUMERACY YEAR 3

Answer all the questions in the Mathematics Activity book.

Find the correct answer for the following questions.

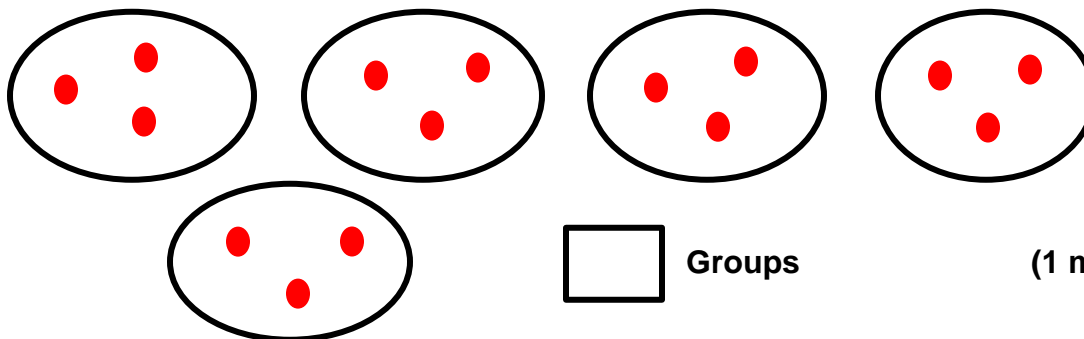
- a. How many groups of 4 are in 12?



Groups

(1 mark)


- b. How many groups of 3 are in 15?



Groups

(1 mark)

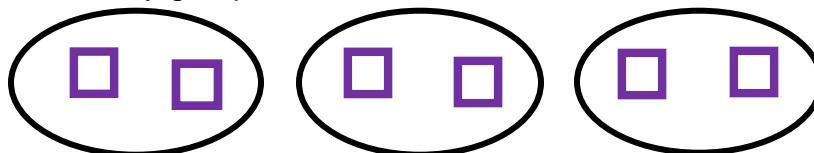
- c. How many groups of 5 are in 10?



Groups

(1 mark)

- d. How many groups of 2 are in 6?



Groups

(1 mark)